

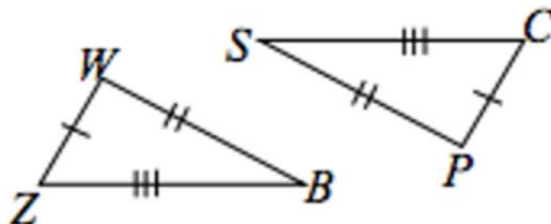


STUDYDADDY

**Get Homework Help
From Expert Tutor**

Get Help

1) Identify all the corresponding congruent parts.



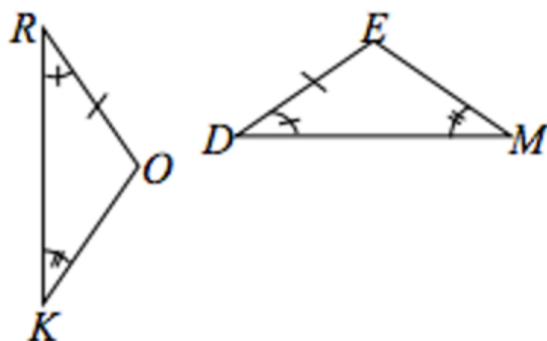
Angle Z is congruent to Angle

Angle W is congruent to Angle

Angle B is congruent to Angle

The triangles are congruent by the postulate

2) Identify all the corresponding congruent parts.

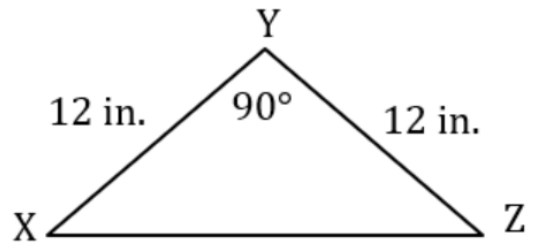
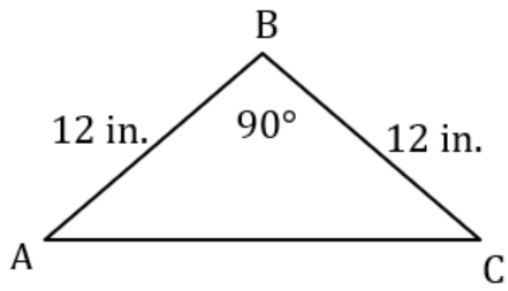


Angle R is congruent to Angle

Angle K is congruent to Angle

Side RO is congruent to Side

The triangles are congruent by the postulate



Angle B is congruent to Angle

Side AB is congruent to Side

Side CB is congruent to Side

The triangles are congruent by which postulate?



STUDYDADDY

**Get Homework Help
From Expert Tutor**

Get Help